

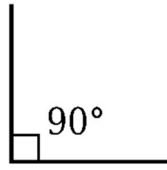
Chasse au Trésor de Maths

Allez dehors et essayez de trouver un exemple de chacun des termes suivants:

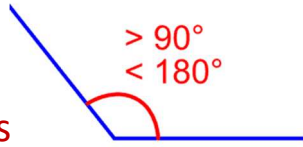
1. Angle droit
2. Angle obtus
3. Angle aigu
4. Cylindre
5. Prisme rectangulaire
6. Sphère
7. Cône
8. Lignes parallèles
9. Équilatéral
10. 50%

Bonne Chance!!!

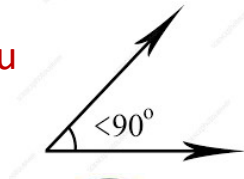
1. Angle droit




2. Angle obtus



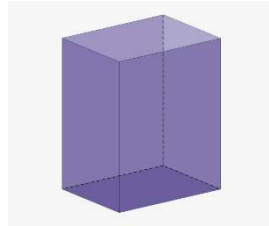
3. Angle aigu



4. Cylindre



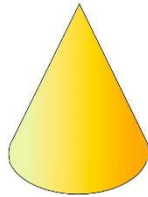
5. Prisme rectangulaire



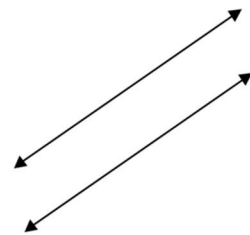

6. Sphère



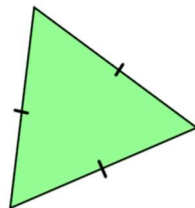
7. Cône



8. Lignes parallèles



9. Équilatéral



10. 50%